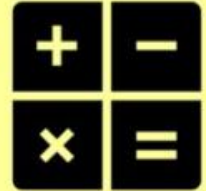


# Maths Shutdown Challenge

Year One | Week Two | Day Five



## Fitness Fluency


Complete these in 5 minutes

1.  $2 + 0 = \square$

2.  $7 - 2 = \square$

3.  $\square + 10 = 14$

4.  $\square + 16 = 17$

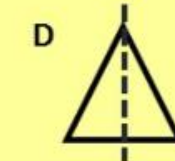
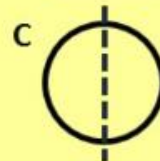
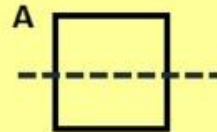
5.  $11 - 1 = \square$  

## STEM – Find half

When I halve a number, I make two equal parts. A half is one of these parts.

### Fluency

Which shape has not been cut in half? Why?



### Problem Solving

Leah has 10p.

She spends half of her money on a lollipop.

How much does she have left?